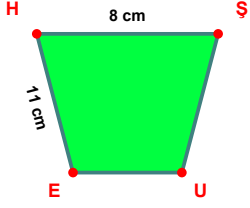
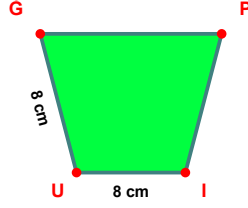


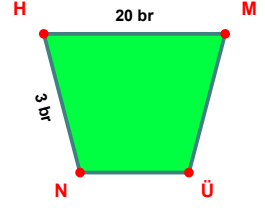
**SORU:** Aşağıdaki şekillerde verilen, kenar uzunlukları farklarını bulunuz.



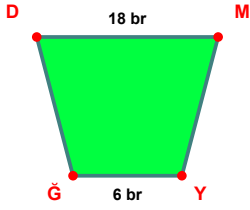
$$|EH| - |HŞ| = \dots\dots\dots$$



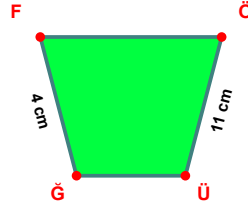
$$|IU| - |UĞ| = \dots\dots\dots$$



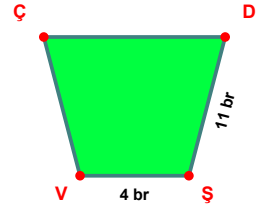
$$|HM| - |NH| = \dots\dots\dots$$



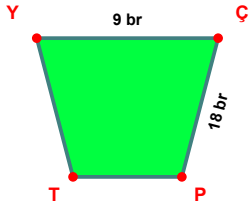
$$|DM| - |YG| = \dots\dots\dots$$



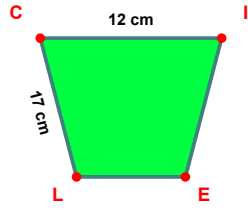
$$|ÖÜ| - |GF| = \dots\dots\dots$$



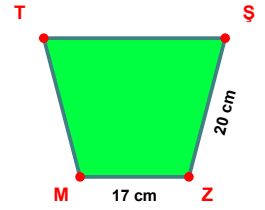
$$|DŞ| - |ŞV| = \dots\dots\dots$$



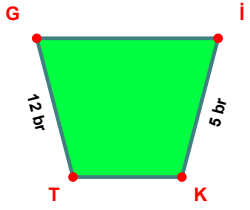
$$|ÇP| - |YÇ| = \dots\dots\dots$$



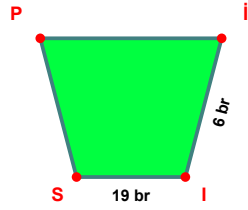
$$|LC| - |CI| = \dots\dots\dots$$



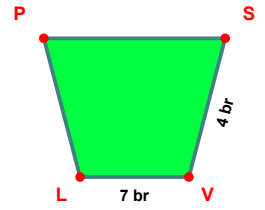
$$|ŞZ| - |ZM| = \dots\dots\dots$$



$$|TG| - |İK| = \dots\dots\dots$$

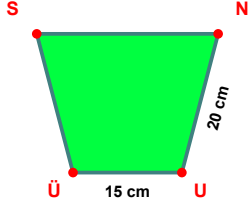


$$|IS| - |İİ| = \dots\dots\dots$$

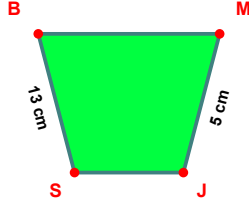


$$|VL| - |SV| = \dots\dots\dots$$

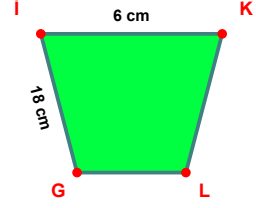
**SORU:** Aşağıdaki şekillerde verilen, kenar uzunlukları farklarını bulunuz.



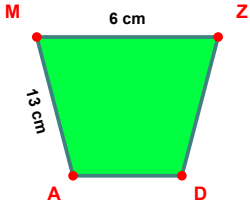
$$|NU| - |UÜ| = \dots\dots$$



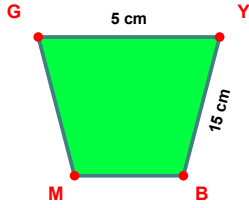
$$|SB| - |MJ| = \dots\dots$$



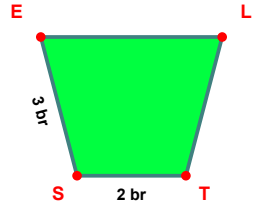
$$|Gi| - |iK| = \dots\dots$$



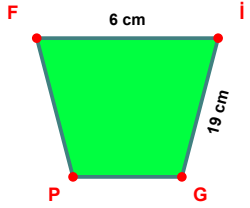
$$|AM| - |MZ| = \dots\dots$$



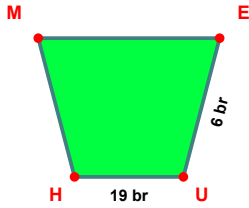
$$|YB| - |GY| = \dots\dots$$



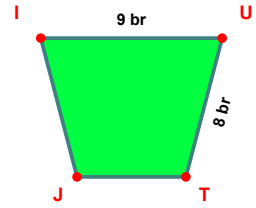
$$|SE| - |TS| = \dots\dots$$



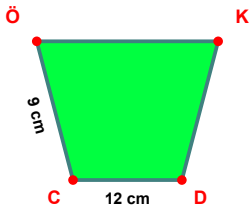
$$|IG| - |FI| = \dots\dots$$



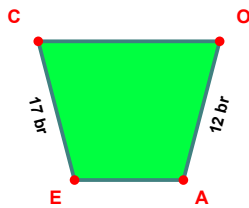
$$|UH| - |EU| = \dots\dots$$



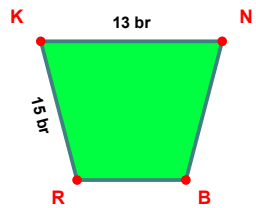
$$|IU| - |UT| = \dots\dots$$



$$|DC| - |CÖ| = \dots\dots$$



$$|EC| - |OA| = \dots\dots$$



$$|RK| - |KN| = \dots\dots$$

SÜREÇ ODAKLI DEĞERLENDİRME ÖLÇEĞİ

Doğru Sayısı: ..... / 24

Öğretmen ilgili kutucuğu işaretler.

Geliştirilmeli (0-8)

İyi (9-14)

Çok İyi (15-20)

Mükemmel (21-24)

☐☐☐☐

Hazırlayan: .....

Bu bölüme sınıfınızın ilgili kazanıma yönelik genel durumuna ilişkin gözlem ve izlenimlerinizi, öğrencilerinizin bu kazanımla ilgili öğrenme eksikliklerini ve bu eksikliklerin giderilmesi amacıyla yaptığınız/yapmayı planladığınız faaliyetleri not edebilirsiniz.

No	Adı - Soyadı	Toplam Puan	Değerlendirme
1			
2			
3			
4			
5			
6			
7			
8			
9			
10			
11			
12			
13			
14			
15			
16			
17			
18			
19			
20			
21			
22			
23			
24			
25			
26			
27			
28			
29			
30			
31			
32			
33			
34			
35			

Hazırlayan: .....